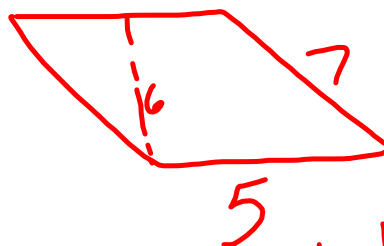


$$A_{\square} = bh$$



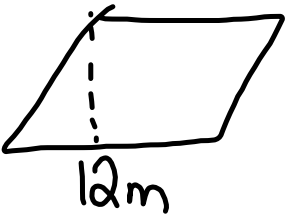
$$\begin{aligned} A_{\square} &= bh \\ &= 5(6) \\ &= 30 \end{aligned}$$

P. 141 (2)

a)



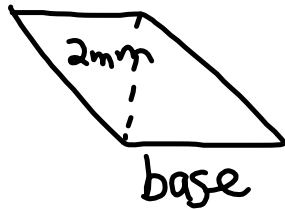
$$\begin{aligned} A_{\square} &= bh \\ &= 13\text{cm} (24\text{cm}) \\ &= 312\text{cm}^2 \end{aligned}$$

6.  Aire = 60m^2

$$A_{\square} = b h$$
$$\frac{60\text{m}^2}{12\text{m}} = \frac{12\text{m} h}{12\text{m}}$$
$$5\text{m} = h$$

(6B)

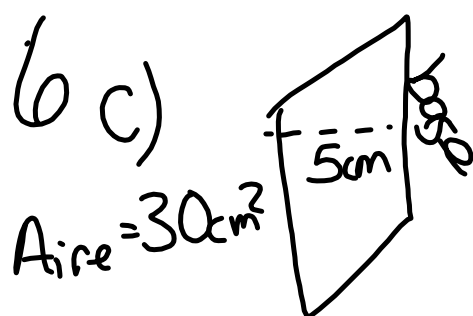
$$A_{\text{ire}} = 6 \text{ mm}^2$$



$$A_{\square} = bh$$

$$\frac{6 \text{ mm}^2}{2 \text{ mm}} = \frac{b(2 \text{ mm})}{2 \text{ mm}}$$

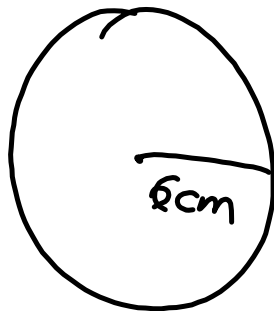
$$3 \text{ mm} = b$$



$$A = bh$$
$$\frac{30\text{cm}^2}{5\text{cm}} = \frac{b(5\text{cm})}{5\text{cm}}$$

$$6\text{cm} = b$$

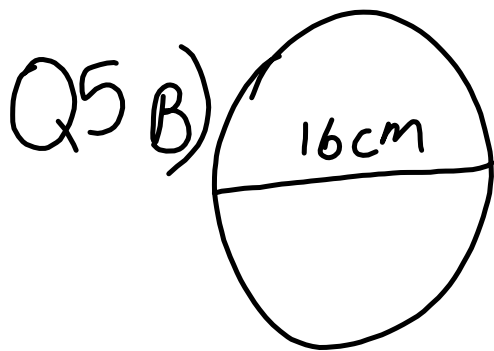
P. 138
Q5



$$C = 2\pi r$$

$$C = 2(3,14)(6\text{cm})$$

$$C = 37,68$$



$$C = \pi d$$

$$C = (3,14)(16 \text{ cm})$$

$$= 50,24 \text{ cm}$$

$d = 38$ trouve le rayon

$$r = \frac{d}{2}$$

$$r = \frac{38}{2} = 19$$

Le rayon est 12 trouve
le diamètre.

$$d = 2r$$

$$d = 2(12)$$

$$d = 24$$

La circconférence est 76,6m
trouve le diamètre.

$$C = \pi d$$

$$\frac{76,6m}{3,14} = \frac{3,14 d}{3,14}$$

$$24,4 m = d$$

unité	1
dixième	0,1
centième	0,01

P. 138

Q 3, 8

P. 142

Q 7 b et c

} ce n'est pas
sur test