

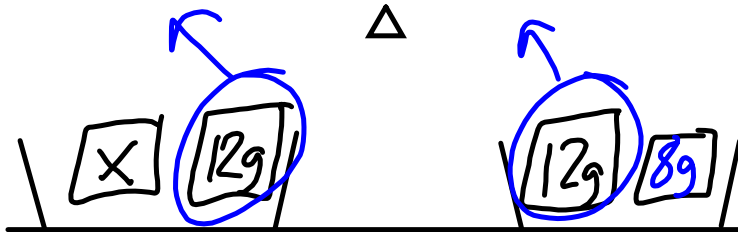
1. 25×36

2. 122×5

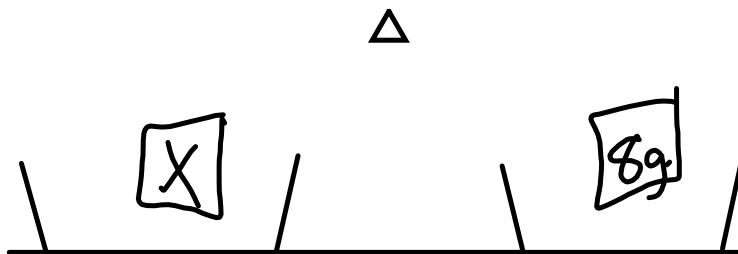
3. 42×50

Balance à plateaux.

$$\underline{x + 12} = \underline{20}$$



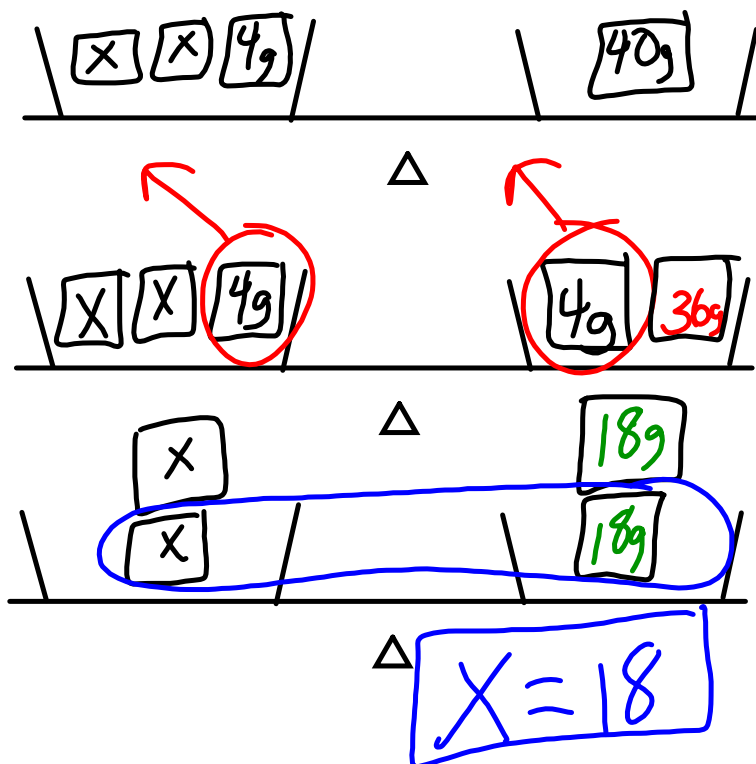
$$\begin{array}{r} -20 \\ -12 \\ \hline 8 \end{array}$$



△ ..

$$x = 8$$

$$2x + 4 = 40$$



$$\begin{array}{r} 40 \\ - 4 \\ \hline 36 \end{array}$$

$$36 \div 2 = 18$$

$$2 \sqrt{36} = 18$$

P. 223

Q1

P. 224

Q 2, 3, 4 et 6